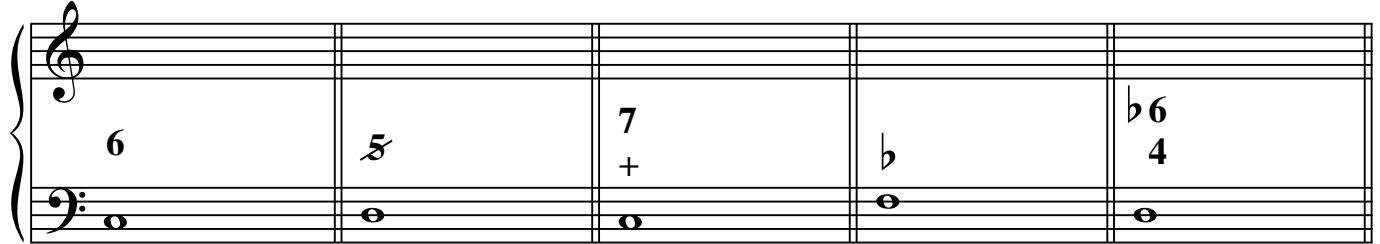


Acceso a 2º E. Profesional


Ejercicio de Teoría

1. Realiza el siguiente cifrado:




Musical notation for exercise 1, showing five measures of music. The notation is in a grand staff (treble and bass clefs). The notes are: Measure 1: Treble clef has a whole note G4, Bass clef has a whole note G2. Measure 2: Treble clef has a whole note F4, Bass clef has a whole note G2. Measure 3: Treble clef has a whole note G4, Bass clef has a whole note G2. Measure 4: Treble clef has a whole note F4, Bass clef has a whole note G2. Measure 5: Treble clef has a whole note G4, Bass clef has a whole note G2. The notes are represented by circles with stems. The first measure has a '6' in the treble staff. The second measure has a '5' in the treble staff. The third measure has a '7' and a '+' in the treble staff. The fourth measure has a 'b' in the treble staff. The fifth measure has a 'b6' and a '4' in the treble staff.

2. Escribe el cifrado correspondiente a estos acordes:



Musical notation for exercise 2, showing five measures of music. The notation is in a grand staff (treble and bass clefs). The notes are: Measure 1: Treble clef has a whole note G4, Bass clef has a whole note G2. Measure 2: Treble clef has a whole note F4, Bass clef has a whole note G2. Measure 3: Treble clef has a whole note G4, Bass clef has a whole note G2. Measure 4: Treble clef has a whole note F4, Bass clef has a whole note G2. Measure 5: Treble clef has a whole note G4, Bass clef has a whole note G2. The notes are represented by circles with stems. The first measure has a sharp sign in the treble staff. The second measure has a flat sign in the bass staff. The third measure has a sharp sign in the treble staff. The fourth measure has a flat sign in the bass staff. The fifth measure has a flat sign in the treble staff and a sharp sign in the bass staff.

3. Reconoce la tonalidad y cada una de estas cadencias:



Musical notation for exercise 3, showing eight measures of music. The notation is in a grand staff (treble and bass clefs). The notes are: Measure 1: Treble clef has a whole note G4, Bass clef has a whole note G2. Measure 2: Treble clef has a whole note F4, Bass clef has a whole note G2. Measure 3: Treble clef has a whole note G4, Bass clef has a whole note G2. Measure 4: Treble clef has a whole note F4, Bass clef has a whole note G2. Measure 5: Treble clef has a whole note G4, Bass clef has a whole note G2. Measure 6: Treble clef has a whole note F4, Bass clef has a whole note G2. Measure 7: Treble clef has a whole note G4, Bass clef has a whole note G2. Measure 8: Treble clef has a whole note F4, Bass clef has a whole note G2. The notes are represented by circles with stems. The first measure has a sharp sign in the treble staff. The second measure has a sharp sign in the treble staff. The third measure has a sharp sign in the treble staff. The fourth measure has a sharp sign in the treble staff. The fifth measure has a sharp sign in the treble staff. The sixth measure has a sharp sign in the treble staff. The seventh measure has a sharp sign in the treble staff. The eighth measure has a sharp sign in the treble staff.

4. Di cuántas familias de instrumentos conoces y pon tres ejemplos de cada una:

5. En qué tonos puedes estar si tienes estos grados:

VI IV III I V

6. Grado y especie de estos intervalos y tipo de consonancia o disonancia:

7. ¿De qué escalas se trata?:

8. Escribe este sonido en todas las claves:

9. En qué tonos puedes estar con estas armaduras:

3^b **5[#]** **2[#]** **6^b** **6[#]**

10. De estos compases di:

Binario/Ternario/P. Desiguales

Nº de tiempos

Unidad de tiempo

5

8

12

4

♩

Nombre y apellidos: